

# Good Morning Friends!

**What day is it today?**

Sing the days of the week song to find out.

What day was it yesterday?

What day will it be tomorrow?

Can you say it in a sentence...

**Today it is...**



# What is the weather like today?

Have a look out of the window or go outside!

Is it hot or cold?

Are the trees moving?

What colour is the sky?

Say your observations in a sentence:


**The weather today is...**



Sunny



Partly Sunny



Partly Cloudy



Sun & Rain



Raining



Thunderstorms



Snowing



Cloudy



Windy



Rainbow



Tornados / Hurricanes




Clear



# Literacy

On the Moon by Anna Milbourne and Benji Davies




<https://www.youtube.com/watch?v=XZ5KsE9oXJU>

Listen to the story.

# Literacy

## Writing space facts



Think about some of the things you have learnt about space.

If you need to watch the clips from yesterday to remind you of some facts

### **Some space facts**

Space is completely quiet.

It takes four days to travel to the moon.

There are footprints on the moon.

There is no air in space.

Write some facts about space. Remember to use finger spaces in your sentences.



# Maths

Our focus today is subtraction

**Today's Number  
is 3**

Show them number 3. Can they tell you the number? What is 1 more than 3? What is 1 less than 3?

Today we are going to use our subtraction skills to tell number stories.

Remember when we take away the number gets smaller.

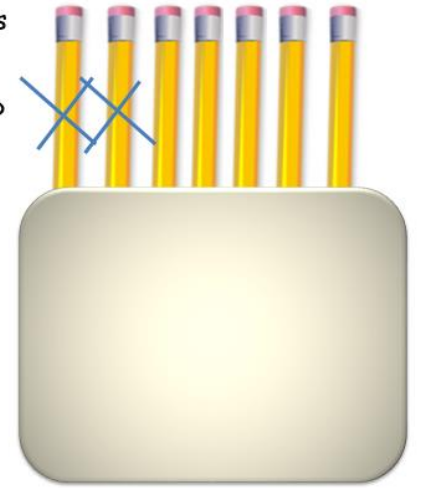
Say the above bus number story to your child.

There are 7 pencils in a pencil pot.

The teacher takes 2 pencils out of the pot.

How many pencils are left?

$$7 - 2 = 5$$



Show your child the picture of the pencil pot and the number sentence underneath. Say 7 take away 2 equals- then ask your child how they can work out the answer. They should say by counting pencils that are not crossed out.

Answer the following number stories in your maths book.

6 passengers are on the bus.  
2 passengers get off.  
How many are on the bus now?



$$\square - \square = \square$$

8 buns on the plate.  
I eat 3.  
How many buns are left?



$$\square - \square = \square$$

There are 10 hot air balloons in a race.  
3 fly away.  
How many balloons are left?




$$\square - \square = \square$$

I got 11 presents for my birthday.  
I open 2 more presents.  
How many presents do I have left to open?



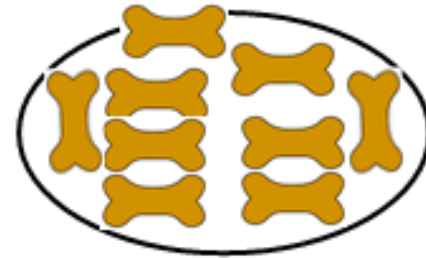
$$\square - \square = \square$$

6 ducks in the pond.  
3 fly away.  
How many ducks are left?



$$\square - \square = \square$$

Floppy has 9 dog bones.  
He eats 3 bones.  
How many bones has he got left?



$$\square - \square = \square$$

Can you think of your own stories? Draw them in your maths book and answer them.

# Phonics

Our sound today is ee.



The children will need a pencil and paper for the lesson.

<https://www.youtube.com/watch?v=hBFFUCraDt8>

If your child needs some extra blending practice then there is also daily lessons to support this.

<https://www.youtube.com/watch?v=gCaXHnaKhHQ>



<https://www.phonicsplay.co.uk/> please login into phonics play.

User name: march20 password: home

There are also the games on phonics play that the children can access anytime.



# Topic      Creative

[https://www.youtube.com/watch?v=7\\_1-TrP9jwA](https://www.youtube.com/watch?v=7_1-TrP9jwA)

Sing 5 Little men  
in a flying saucer

