


Elm Class

Friday 24th April



Miss Davies





Friday 24th April

Today's lessons will be:

1. Phonics or Spellings
2. English
3. Maths
4. PE


Happy Friday
Elm friends!



Year 1 Phonics



- Phonics booklet.
- Revise the tricky 'ue' words from yesterday: Tuesday, rescue, value, barbecue, statue, due.
- Complete the mini story (page 33).
- Remember to circle the 'ue' piece of code in the words.
- If you are not sure what a word means or says underline it and ask an adult afterwards.



After you have finished this work read a book for at least 10 minutes.

Year 2 LO: Spellings.



Copy the sentences and fill in the missing words from this list:

giggle apple parcel table little label

- 1.) We had a delicious _____ pie for our tea.
- 2.) The silly clown made all the children _____.
- 3.) My sister had to put a _____ on the _____ before she could post it.
- 4.) I have a _____ brother who can be very annoying.
- 5.) Mum asked me to help her to clear the _____ after our tea.

English

Friday 24th April

LO: Instructions.



- TASK: Write a set of instructions on how to look after your pet.
- Year 1 - Write step by step sentences telling the reader how to look after your pet. Finished? Draw pictures of you looking after the pet.
- Year 2 - Remember you will need a heading 'How to look after a...' and subheadings for equipment and method.



Y2 Example:

Equipment:

- Dog food
- Water bowl
-

Method:

1.) First you will need...

How to look after a dog





Year 1 Maths answers

Answers from *yesterday's work*. Mark your own work.

1.) 4, 6, 8, 10, 12, 14, 16, 18

2.) 20, 18, 16, 14, 12, 10, 8, 6

3.) 5, 10, 15, 20, 25, 30, 35, 40, 45

4.) 60, 55, 50, 45, 40, 35, 30, 25, 20

5.) 120, 110, 100, 90, 80, 70, 60

6.) 24, 22, 20, 18, 16, 14, 12



Year 1 Maths answers

Answers from **yesterday's work**. Mark your own work.

1.) Matt counts on in **tens** from the number 60. What are the next 2 numbers he counts?

70, 80

2.) Usma is counting in **twos**. She starts at 10. What are her next 3 numbers?

12, 14, 16

3.) Matt is counting in **fives**. He starts at 15. What are his next 3 numbers?

20, 25, 30

Matt was counting in **fives**.

He missed out a number.

Write the number that Matt missed out in the correct place.

5 10 15 20 **25** 30 35

Usma has saved some **5p** coins in a box.

Altogether she has **25p**.

How many **5p** coins does Usma have?

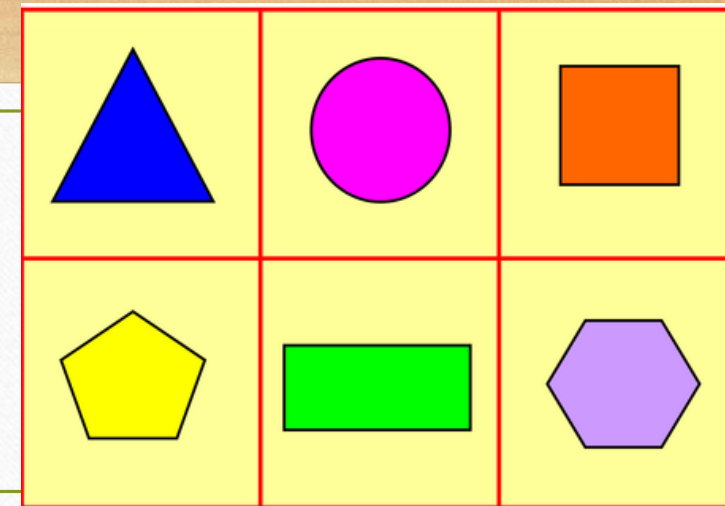


5 coins

Year 1 Maths

24.4.20

LO: Finding 2D shapes.



- **TASK 1** Go on a shape hunt around your home or on a walk (if possible). Look out for any 2D shapes. Ask an adult to take pictures. Discuss their names and properties (what makes them that shape).

Example on next slide.

- **TASK 2** Write a list of all the 2D shapes you found. *Practise spellings.*

rectangle square circle triangle hexagon octagon

rectangle square circle triangle hexagon octagon

The clock is a circle.



What 2D shapes can you see?




Year 1 Maths continues...

Challenge - thinking time Discuss the answers with someone at home.



Part of a shape is hidden.



What shape could it be?

Is there more than one possibility?

Explain your thinking.

Here is part of a shape.



How many different ways can you complete the shape using one or more straight lines?

Compare your shape with a partner.

What is the same and what is different?



Year 2 Maths

Yesterday's Answers!

Mark your own work from yesterday.



My string is 6cm.

The colour is blue.



My string has been measured in divisions of 10.

The colour is red.



My string is 30cm.

The colour is purple.



My string is 35cm.

The colour is green.



My string has been measured in divisions of 1s.

The colour is pink.



My string is 10cm.

The colour is yellow.



Year 2 Maths

Yesterday's Answers!
Mark your own work from yesterday.



My string is 90cm.

The colour is red.



My string is 3cm long.

The colour is blue.



My string is 5cm less than 40cm.

The colour is green.



My string has been measured in divisions of $\frac{1}{2}$.

The colour is yellow and it measures $2\frac{1}{2}$.



My string has been measured in divisions of 1s.

The colour is pink and it measures 7cm.



My string is 40cm.

The colour is purple.

Year 2 Maths

Answers will be on
Monday's slides.

Challenge activity
on the next slide...

24/04/20

LO: Mental Arithmetic

Remember you can do working out in your book to help you.
Do as many as you can.

1.) $2+4+8=$

2.) $\underline{\quad} = 70+30$

3.) $\underline{\quad} = 25-6$

4.) Half of 24 =

5.) $90-40=$

6.) $55+30=$

7.) $86-40=$

8.) $\underline{\quad} = 5 \times 5$

9.) $63+27=$

10.) $10 \times 6=$

11.) Double 35 =

12.) $46+39=$

13.) $51-28=$

14.) $\underline{\quad} = 12 \times 5$

15.) $\underline{\quad} = 83-36$

Year 2 Maths

Challenge Activity -

How many 5 X table facts can you think of?
Can you think of some division ones too?


For example -

$$3 \times 5 = 15$$

$$5 \times 3 = 15$$

$$15 \div 5 = 3$$

$$15 \div 3 = 5$$





PE



Even if you have to stay indoors more than usual it is still really important to stay fit and healthy.

TASKS

1. Complete Go Noodle work out video.
2. Teach the moves to somebody in your home.
3. Do the video again asking someone at home to join you.

Click the link below for this week's PE lesson with GoNoodle.

<https://www.youtube.com/watch?v=KhfkYzUwYFk>



GoNoodle



Challenge - make your own Go Noodle workout. Teach it to someone at home. Ask a grown up to post your video on our school's Facebook page.



Bournebrook

Church of England Primary School

If you feel unsafe at home or are worried that a friend is not safe, call Mrs Patchett on 07787261064.

Remember to talk to someone on your Network Hand if you are worried about something.



If nobody is listening to your worries or there is nobody to talk to, call Childline on 0800 1111

Adults at Childline are used to talking to children with worries and can help you.



You're great Elm friends.
You have finished all of
your school work for today.



Well done!